





















Centers of Triangles Card Sort

NAME \_\_\_\_\_

Cut out the 20 boxes below  
Determine which center is shown in each triangle  
Place the card in the correct category

A 	B 	C 	D 
E 	F 	G 	H 
I 	J 	K 	L 
M 	N 	O 	P 
Q 	R 	S 	T 

*Handwritten notes in blue ink:*

- Intersection of medians
- 1 bisector
- 3 bisectors
- orthocenter
- centroid
- incenter
- circumcenter
- centroid
- orthocenter
- circumcenter
- centroid
- orthocenter
- circumcenter
- centroid
- orthocenter
- circumcenter
- centroid
- orthocenter
- circumcenter
- centroid
- orthocenter
- circumcenter